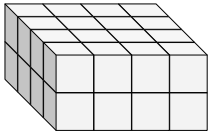


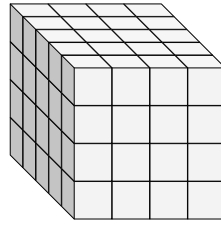


Find the length, width and height of the rectangular prism. Then find the volume.

Ex)



1)



Answers

Ex. 4 4 2 32

1. _____

2. _____

3. _____

4. _____

5. _____

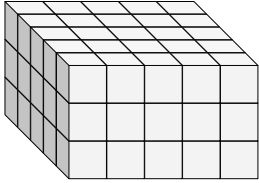
6. _____

7. _____

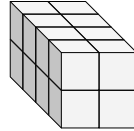
8. _____

9. _____

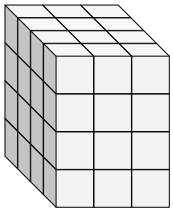
2)



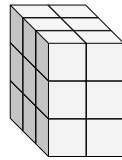
3)



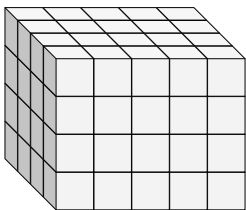
4)



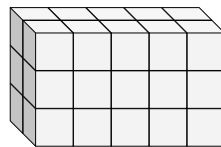
5)



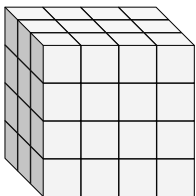
6)



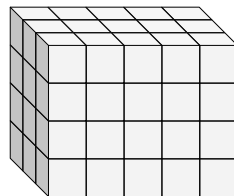
7)



8)

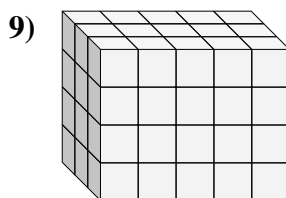
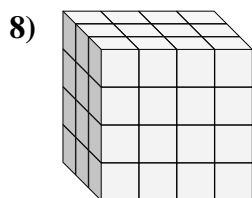
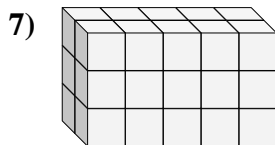
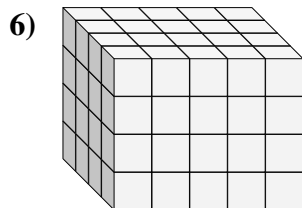
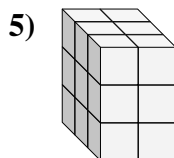
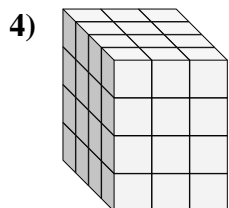
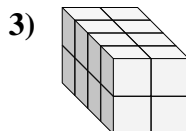
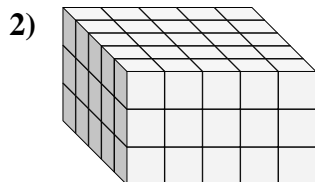
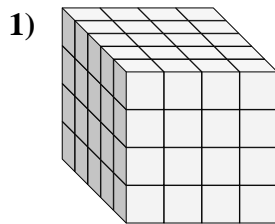
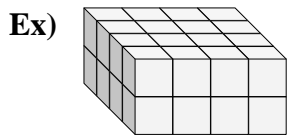


9)





Find the length, width and height of the rectangular prism. Then find the volume.



Answers

Ex. 4 4 2 32

1. 5 4 4 80

2. 5 5 3 75

3. 4 2 2 16

4. 4 3 4 48

5. 3 2 3 18

6. 4 5 4 80

7. 2 5 3 30

8. 3 4 4 48

9. 3 5 4 60